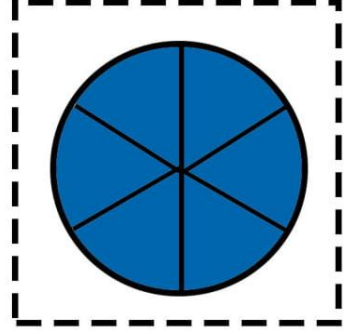
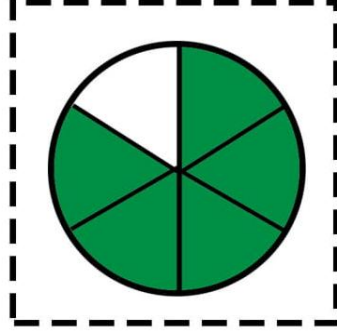
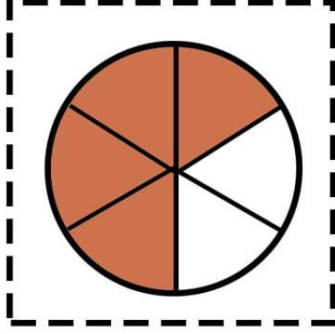

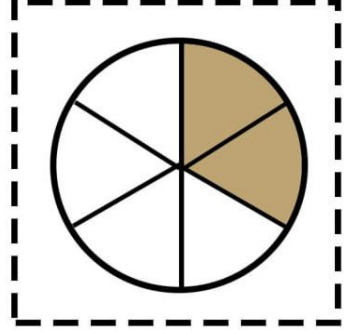
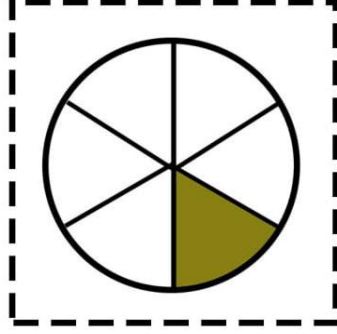
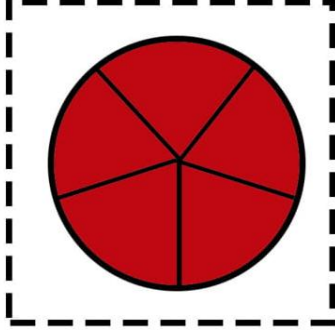
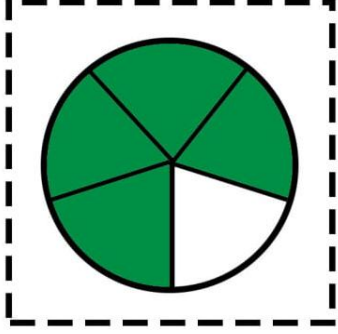
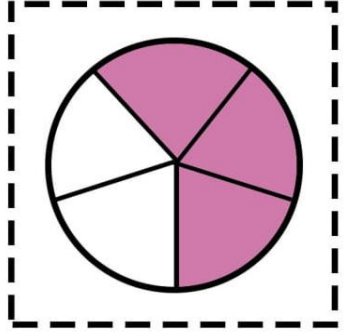
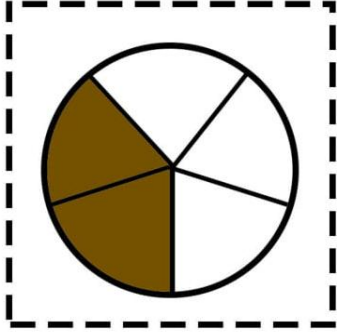
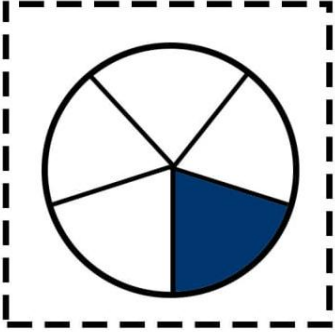
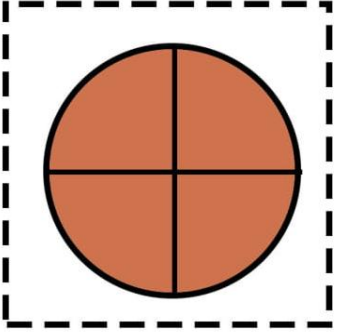
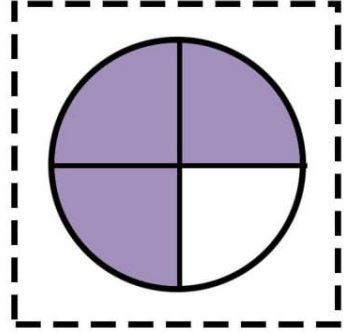
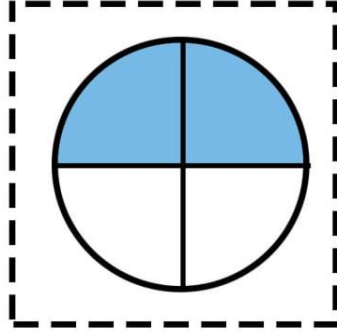
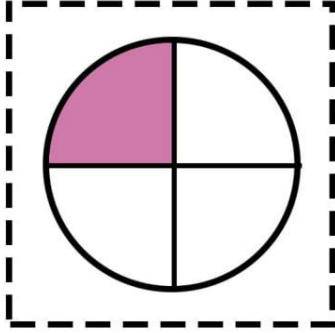
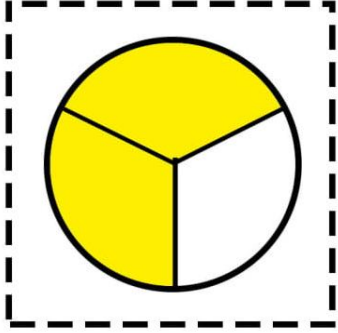
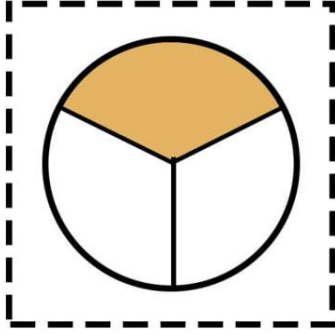
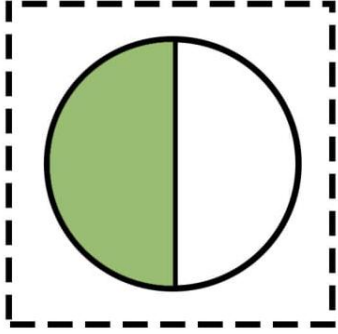





4.SINIF MATEMATİK
ÇALIŞMA KAĞIDI

Adım:.....
Soyadım:.....
Numaram:


KES
YAPIŞTIR




$$\frac{1}{2}$$



$$\frac{1}{3}$$




$$\frac{1}{4}$$




$$\frac{1}{5}$$



$$\frac{1}{6}$$




$$\frac{2}{3}$$




$$\frac{2}{4}$$




$$\frac{2}{5}$$




$$\frac{2}{6}$$




$$\frac{3}{4}$$




$$\frac{3}{5}$$




$$\frac{3}{6}$$




$$\frac{4}{5}$$




$$\frac{4}{6}$$




$$\frac{5}{6}$$




$$\frac{6}{6}$$



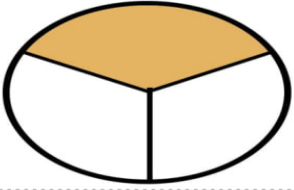
$$\frac{5}{5}$$



$$\frac{4}{4}$$



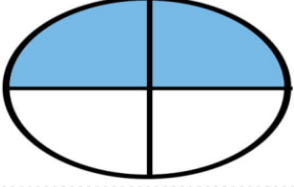
Aşağıdaki şekille gösterilen kesirlerin doğru yazılışını yuvarlak içine alınız.



$$\frac{1}{2}$$

$$\frac{4}{5}$$

$$\frac{1}{3}$$



$$\frac{5}{6}$$

$$\frac{2}{4}$$

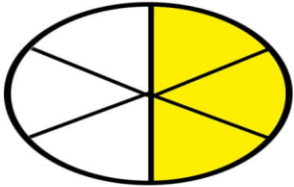
$$\frac{3}{3}$$



$$\frac{1}{2}$$

$$\frac{3}{5}$$

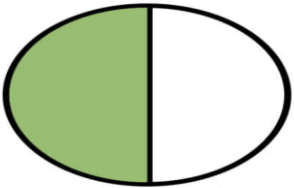
$$\frac{2}{6}$$



$$\frac{2}{2}$$

$$\frac{3}{5}$$

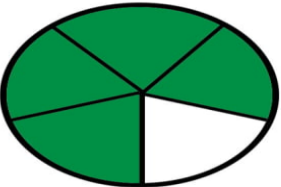
$$\frac{3}{6}$$



$$\frac{1}{2}$$

$$\frac{1}{5}$$

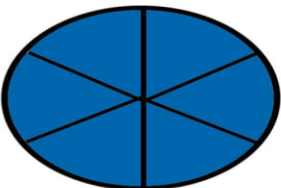
$$\frac{1}{4}$$



$$\frac{1}{2}$$

$$\frac{4}{5}$$

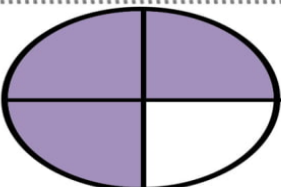
$$\frac{1}{3}$$



$$\frac{5}{6}$$

$$\frac{2}{4}$$

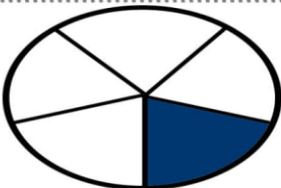
$$\frac{6}{6}$$



$$\frac{1}{2}$$

$$\frac{3}{4}$$

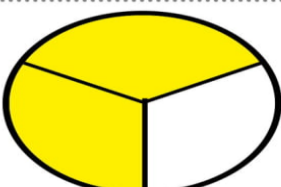
$$\frac{2}{6}$$



$$\frac{1}{5}$$

$$\frac{3}{5}$$

$$\frac{3}{6}$$




$$\frac{1}{2}$$


$$\frac{2}{3}$$

$$\frac{1}{4}$$


Verilen kesirleri boyayarak gösterimini yapınız.




$$\frac{2}{6}$$



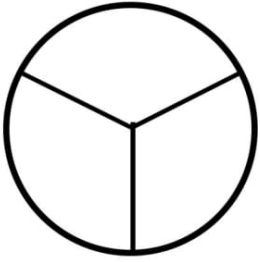
$$\frac{5}{6}$$



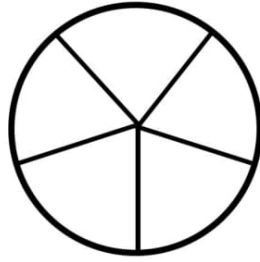
$$\frac{1}{2}$$




$$\frac{1}{4}$$



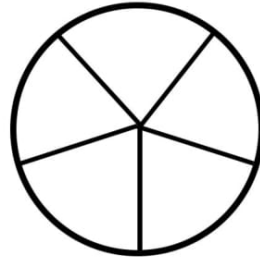
$$\frac{1}{3}$$



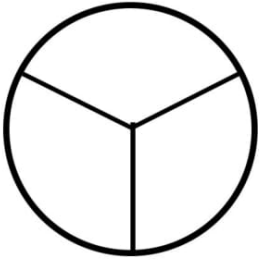
$$\frac{1}{5}$$




$$\frac{3}{4}$$



$$\frac{4}{5}$$



$$\frac{2}{3}$$




$$\frac{2}{4}$$




Aşağıdaki kesirleri verilen şekiller üzerinde çizerek gösteriniz.


$$\frac{1}{5}$$




$$\frac{3}{3}$$




$$\frac{3}{5}$$




$$\frac{1}{4}$$




$$\frac{3}{4}$$



$$\frac{3}{6}$$



$$\frac{4}{5}$$



$$\frac{3}{4}$$

