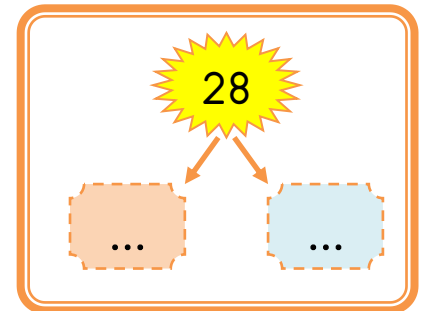
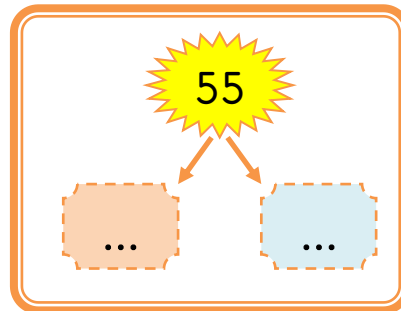
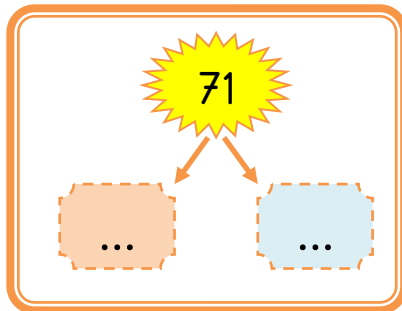
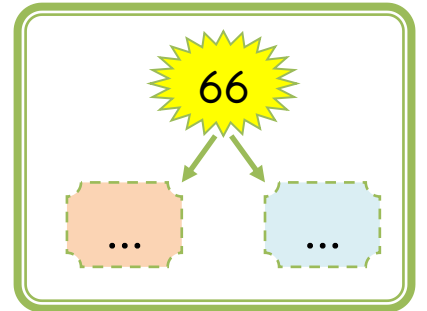
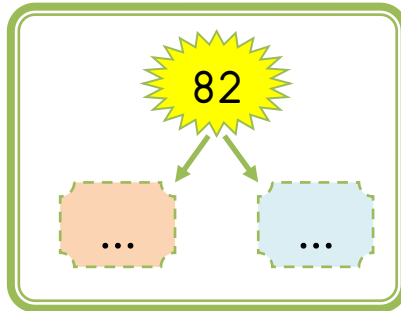
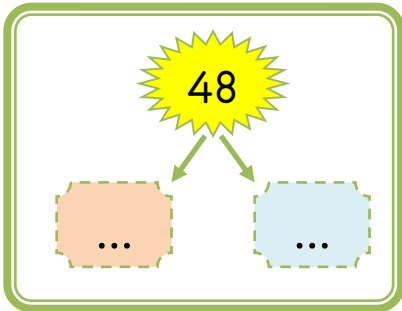
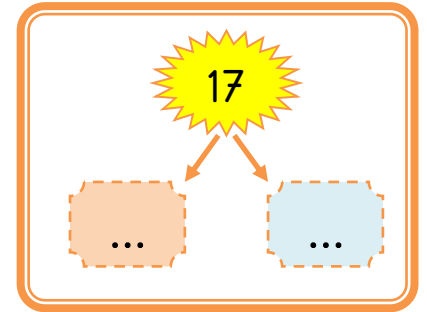
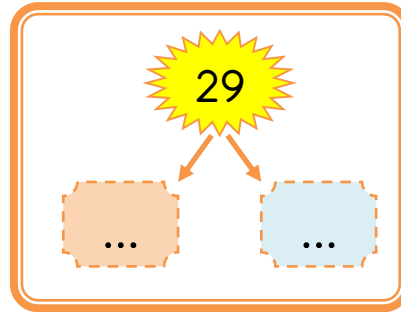
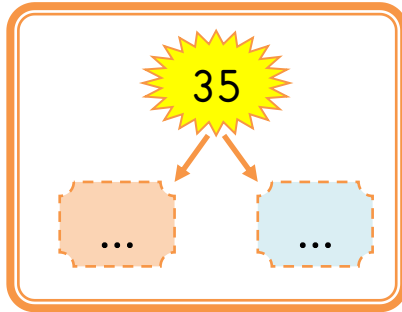
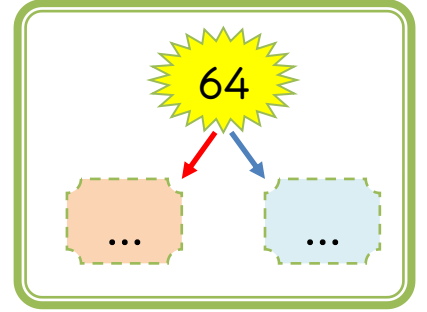
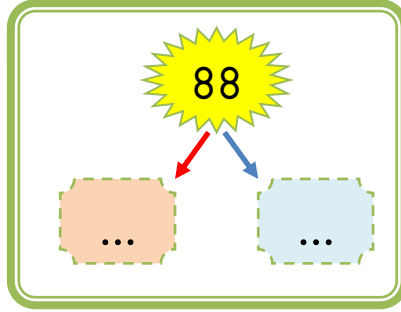
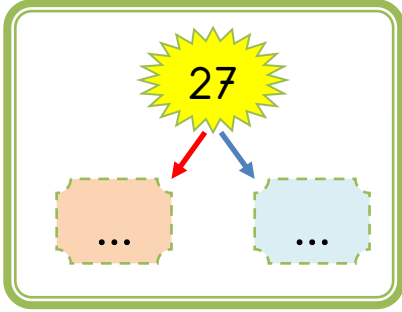
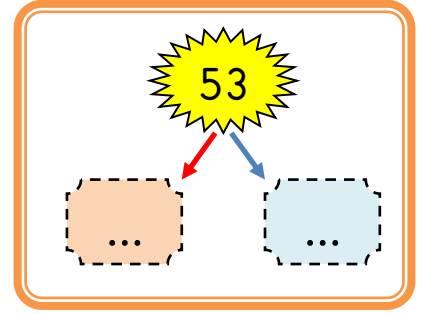
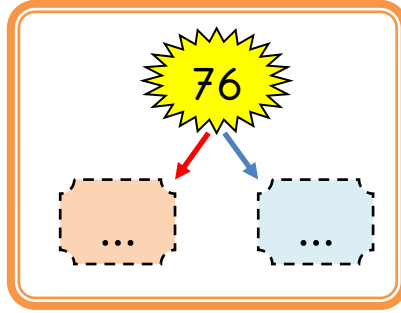
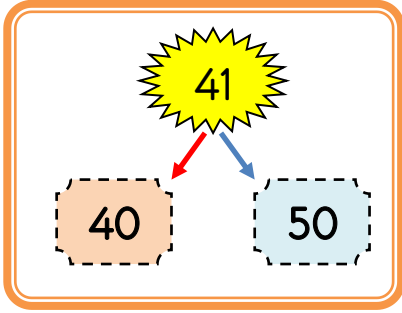
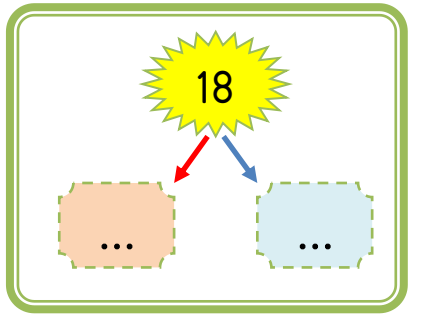
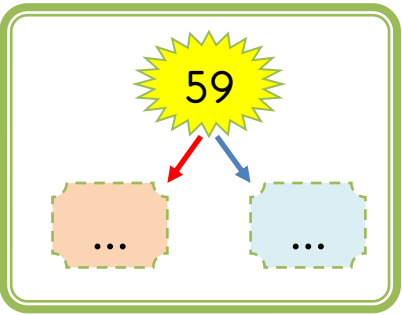
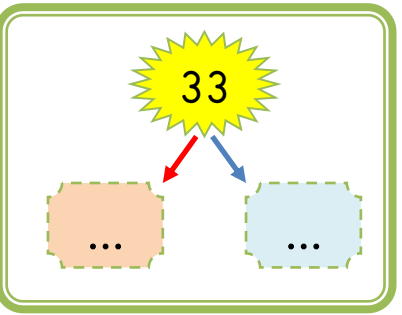
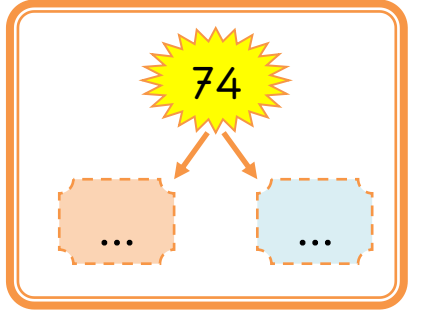
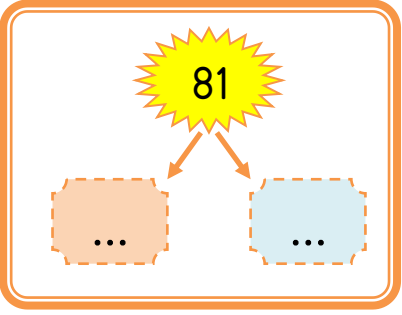
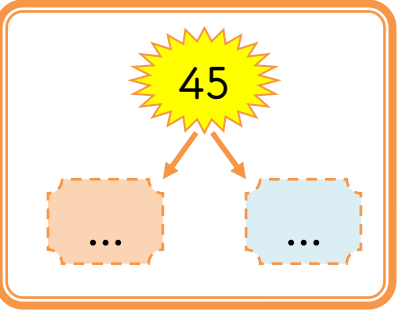
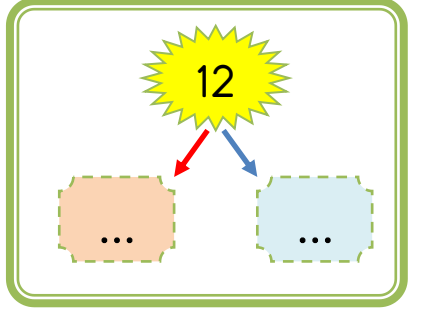
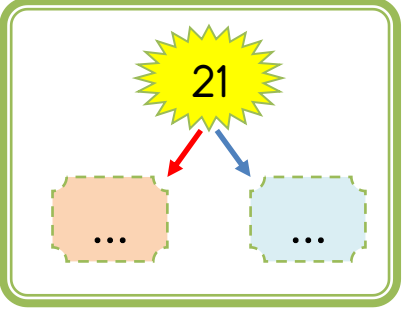
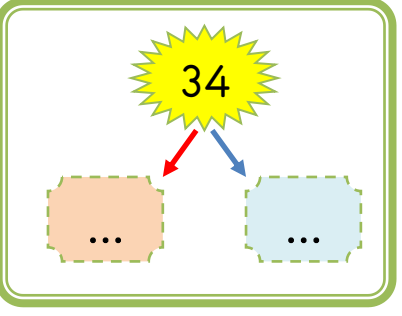
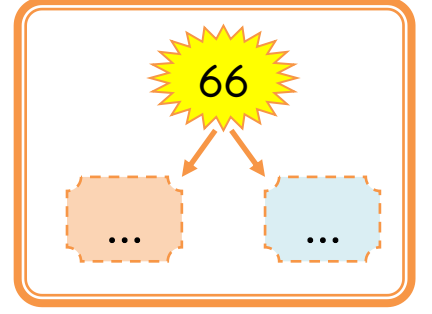
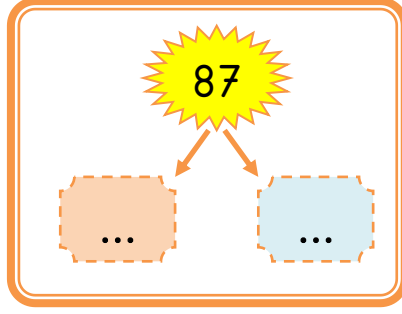
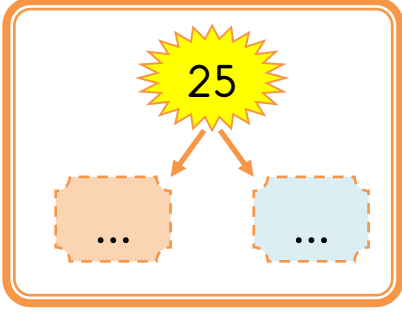
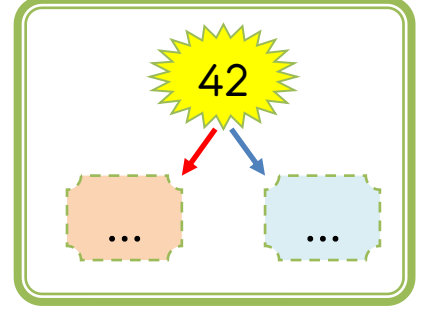
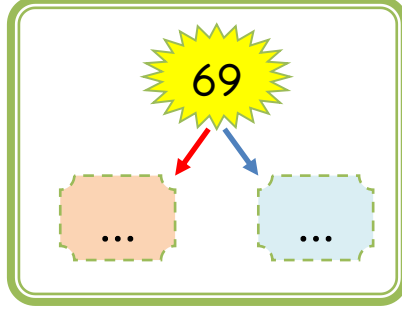
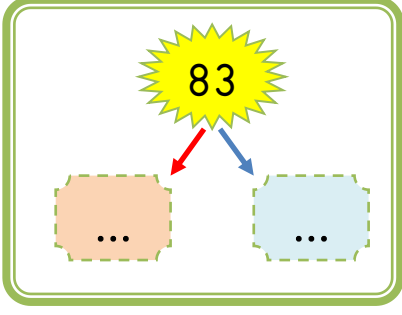


Aşağıdaki sayıların hangi onluklar arasında olduğunu boşluklara yazınız .

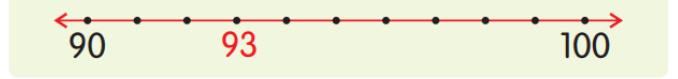
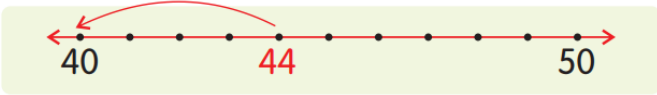




Aşağıdaki doğal sayıları en yakın oldukları onluklara yuvarlayınız.

|            |            |            |            |
|------------|------------|------------|------------|
| 12 → ..... | 23 → ..... | 38 → ..... | 48 → ..... |
| 25 → ..... | 17 → ..... | 42 → ..... | 55 → ..... |
| 63 → ..... | 24 → ..... | 87 → ..... | 96 → ..... |
| 31 → ..... | 13 → ..... | 29 → ..... | 34 → ..... |

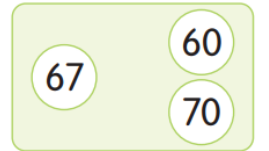
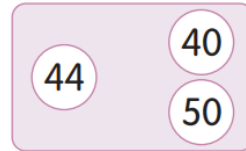
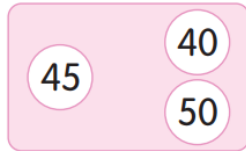
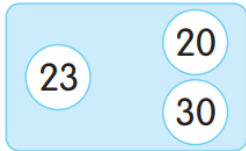
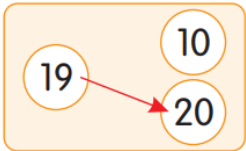
Aşağıdaki sayı doğrusu üzerinde bulunan sayıları en yakın olduğu onluğa örnekteki gibi yuvarlayınız.



Aşağıdaki sayıları, en yakın olduğu onlukla örnekteki gibi eşleştiriniz.

|    |    |    |    |    |    |
|----|----|----|----|----|----|
| 17 | 40 | 55 | 20 | 63 | 60 |
| 25 | 20 | 47 | 60 | 85 | 90 |
| 42 | 30 | 18 | 50 | 77 | 80 |

Aşağıdaki doğal sayıların hangi onluğa daha yakın olduğunu bularak eşleştirme yapınız.



Aşağıdaki sayıların en yakın oldukları onlukları noktalı yerlere yazınız.

|            |            |            |            |
|------------|------------|------------|------------|
| 8 → .....  | 63 → ..... | 76 → ..... | 18 → ..... |
| 45 → ..... | 49 → ..... | 85 → ..... | 27 → ..... |
| 32 → ..... | 86 → ..... | 94 → ..... | 35 → ..... |

Aşağıdaki soruları cevaplayınız.

1) İbrahim'in yaşının en yakın onluğu 40'tır. Buna göre, İbrahim en fazla kaç yaşındadır?

2) 48 sayısındaki onluk ve birliklerin yerleri değiştirildiğinde oluşan yeni sayı hangi onluğa daha yakın olur?

3) 75 doğal sayısının en yakın onluğu hangi sayıdır?

4) En yakın onluğu 30 olan en büyük doğal sayı kaçtır?

5) Bir düzine kalemin en yakın olduğu onluk aşağıdakilerden hangisidir?

6) 4 birlik 8 onluktan oluşan sayı hangi onluğa yuvarlanır?

7) Ahmet'in yaşının en yakın olduğu onluk 30'dur. Buna göre, Ahmet en fazla kaç yaşında olabilir?



8) Yandaki torbaların içlerindeki misket sayıları üzerlerine yazılmıştır. Misket sayılarını en yakın oldukları onluklara